

Name \_\_\_\_\_

## Relating Graphs and Tables

For 5 months, the Department of Fish & Game counted the number of fish that were stocked in the county lakes, but the department mixed up their tables and graphs. Match each table to the correct line graph.

1. Lake: \_\_\_\_\_

Monthly Number of Fish Stocks in County Lakes					
Month	1	2	3	4	5
Fish Stocks	150	195	225	280	340

2. Lake: \_\_\_\_\_

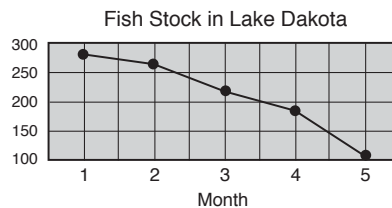
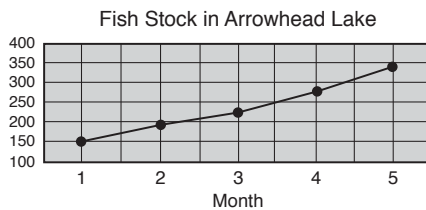
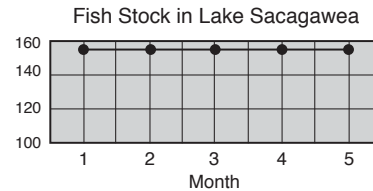
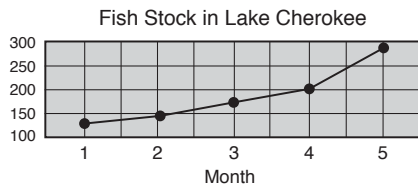
Monthly Number of Fish Stocks in County Lakes					
Month	1	2	3	4	5
Fish Stocks	153	153	153	153	153

3. Lake: \_\_\_\_\_

Monthly Number of Fish Stocks in County Lakes					
Month	1	2	3	4	5
Fish Stocks	280	265	220	185	110

4. Lake: \_\_\_\_\_

Monthly Number of Fish Stocks in County Lakes					
Month	1	2	3	4	5
Fish Stocks	130	145	175	205	290



## Stretch Your Thinking

5. Use the line graphs above to describe the overall changes in the numbers of fish stocks in each lake.

---



---



---



---